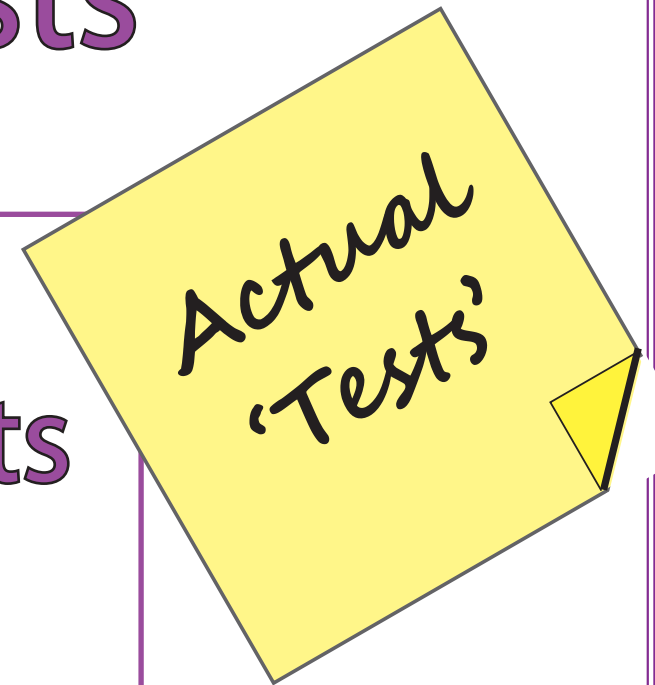



'Big Maths, Beat That'

CLIC Level Tests


Weekly
Key Assessments
For
Up-levelling



Week Ten



Name: _____



BIG MATHS BEAT THAT!

Write these numbers in order

7	9	2
<input type="text"/>	<input type="text"/>	<input type="text"/>

$$9 + \square = 10$$

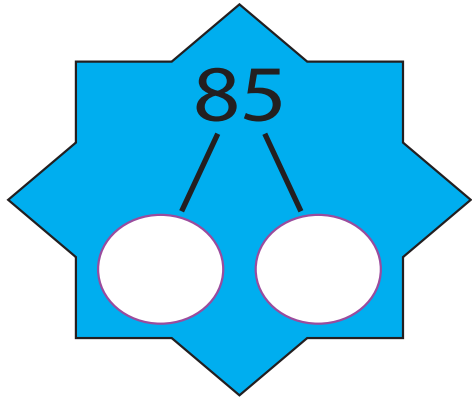
1 less than 9 is?

Double 1 is

8 take away 6 is...

$$3 + 5 =$$

Half of 12 is...



Write out the fact family for:

$8 + 4 = 12$

Name: _____

$90 + 30 =$

BIG MATHS BEAT THAT!

Draw a ring around the **even** numbers

24 75 40 13

$6 \times 3 =$

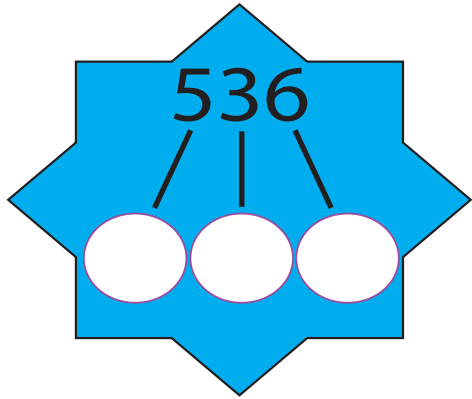
Double 8 is

$65 + \square = 70$

$94 + 7 =$

$31 - 8 =$

Half of 18 is...



Write out the fact family for:

$41 \times 12 = 492$

Name: _____

$76 \times 10 =$

$930 \div 10 =$

BIG MATHS BEAT THAT!

$71 \div 5 =$

2.9

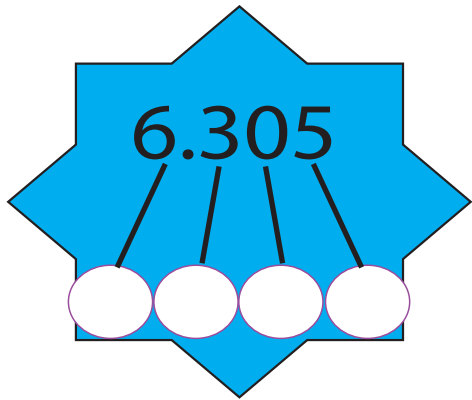
$74 + \square = 100$

$50 \times 40 =$

$529 + 447 =$

$645 - 278 =$

$87 \times 6 =$



$$\frac{1}{2} = \bigcirc = \bigcirc$$

fraction decimal percentage

Name: _____

$$36 \times 100 = \bigcirc$$

$$479 \div 10 = \bigcirc$$

BIG MATHS BEAT THAT!

Write a square
number between
50 and 70

$$44 \times 66 = \bigcirc$$

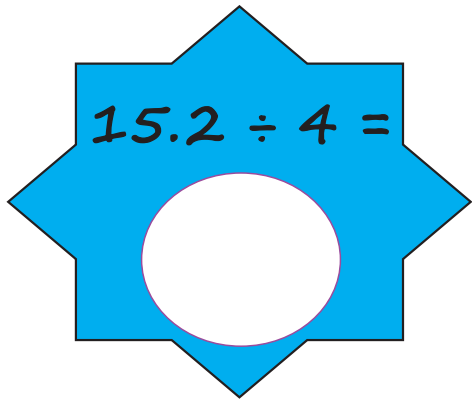
$$232 + \square = 1000$$

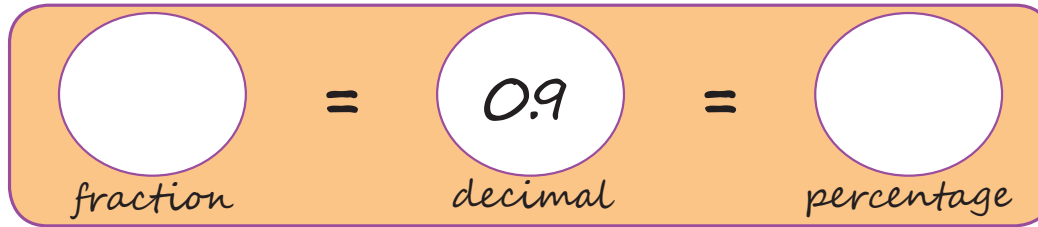
$$329 \div 5 = \bigcirc$$

$$6.4 \times 3 = \bigcirc$$

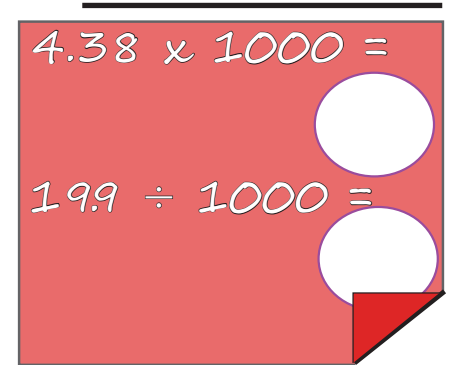
$$5.09 + 9.95 = \bigcirc$$

$$3.27 - 2.57 = \bigcirc$$

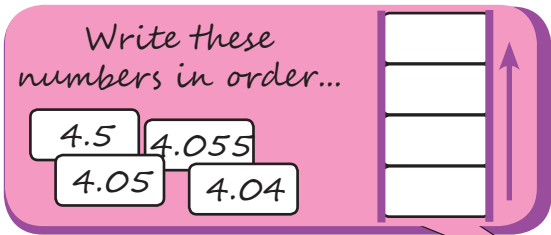

$$15.2 \div 4 =$$


$$\text{fraction} = 0.9 = \text{percentage}$$

Name: _____

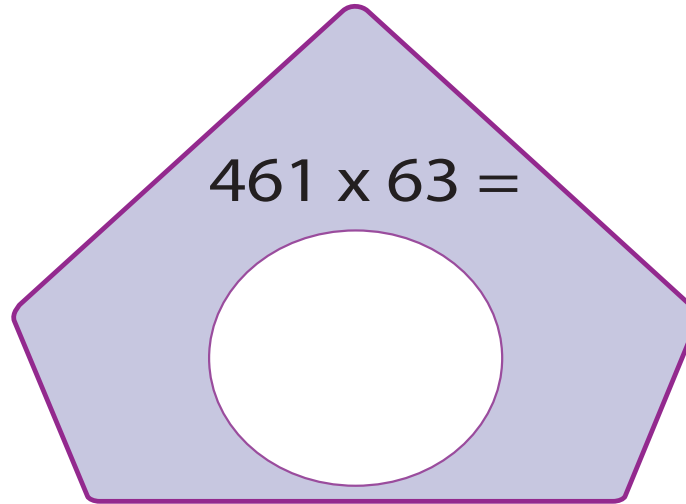

$$4.38 \times 1000 =$$
$$199 \div 1000 =$$

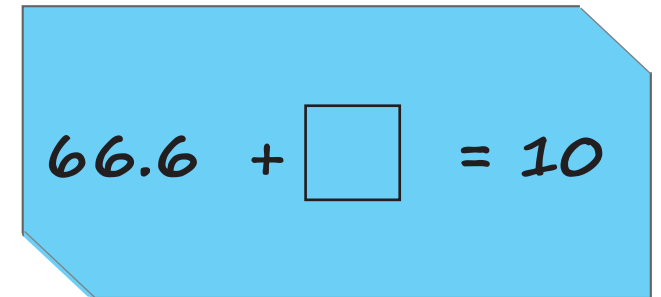
BIG MATHS BEAT THAT!

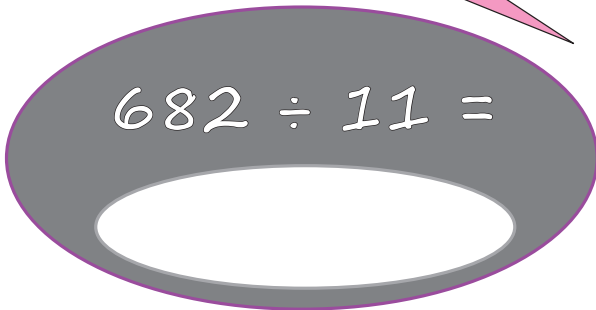


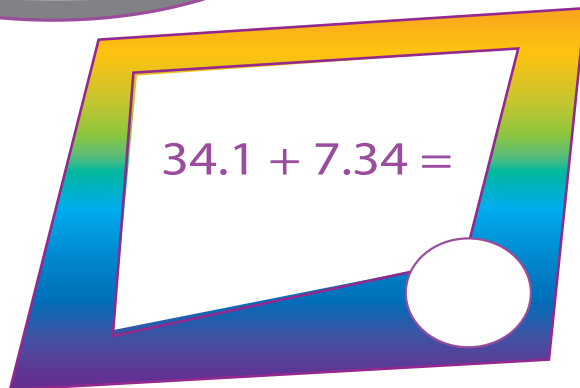
Write these numbers in order...

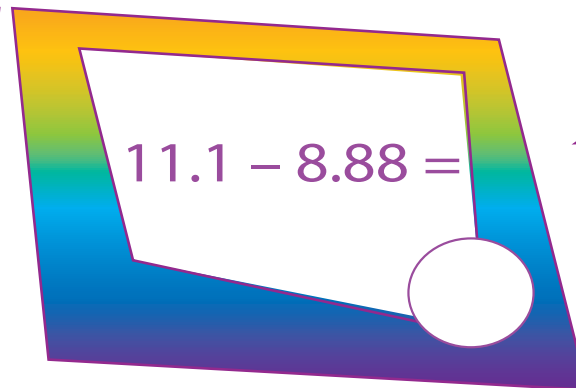
4.5	4.055
4.05	4.04

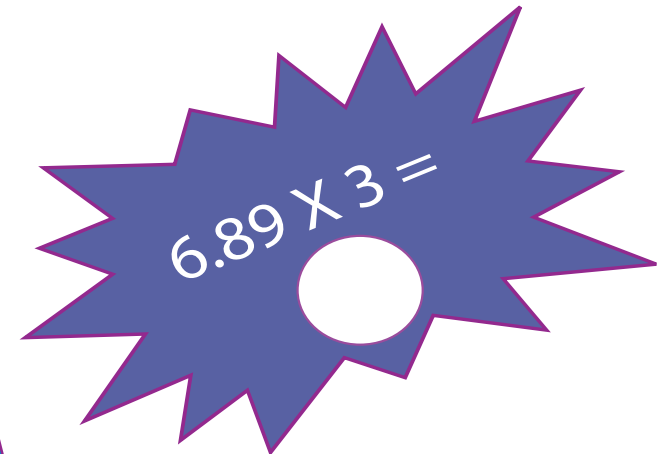

$$461 \times 63 =$$


$$66.6 + \square = 10$$


$$682 \div 11 =$$


$$34.1 + 7.34 =$$


$$11.1 - 8.88 =$$


$$6.89 \times 3 =$$

Answers

Week Ten

Answers

8

$$3 + 3 = 6$$

Name: _____

How many leavess?

7

BIG MATHS BEAT THAT!

Write these numbers in order

7	9	2
2	7	9

$$9 + 1 = 10$$

1 less than 9 is?

8

Double 1 is

2

8 take away 6 is...

2

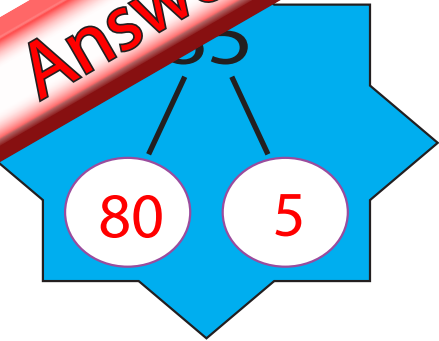
3 + 5 =

8

Half of 12 is...

6

Answers



Write out the fact family for:

$8 + 4 = 12$

$12 - 4 = 8$

$4 + 8 = 12$

$12 - 8 = 4$

Name: _____

$90 + 30 =$

120

BIG MATHS BEAT THAT!

Draw a ring around the **even** numbers

24

75

40

13

$6 \times 3 =$

18

Double 8 is

16

$65 + 5 = 70$

Half of 18 is...

9

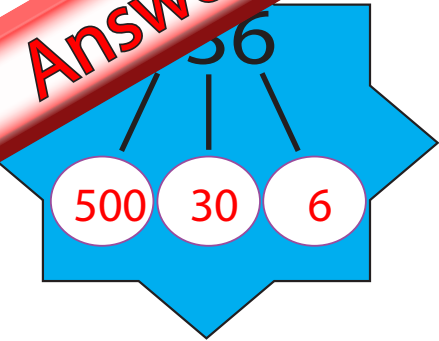
$94 + 7 =$

101

$31 - 8 =$

23

Answers



Write out the fact family for:

$41 \times 12 = 492$

$492 \div 41 = 12$

$12 \times 41 = 492$

$492 \div 12 = 41$

Name: _____

$$\begin{array}{r} 76 \times 10 = \\ 930 \div 10 = \end{array}$$

760
93

BIG MATHS BEAT THAT!

$71 \div 5 = 14 \text{ r } 1$

$74 + 26 = 100$

$50 \times 40 =$

2000

2.9

2

0.9

$529 + 447 =$

976

$645 - 278 =$

367

$87 \times 6 =$

522

Answers

6.305

6 0.3 0.00 0.005

$\frac{1}{2}$ = 0.5 = 50%

fraction decimal percentage

Name: _____

$36 \times 100 = 3600$

$479 \div 10 = 47.9$

BIG MATHS BEAT THAT!

Write a square number between 50 and 70

64

$44 \times 66 =$

2904

$232 + 768 = 1000$

$329 \div 5 =$

65 r 4

$6.4 \times 3 = 19.2$

$5.09 + 9.95 =$

15.04

$3.27 - 2.57 =$

0.7

Answers

$2 \div 4 =$

3.8

$\frac{9}{10} =$

fraction

=

$0.9 =$

decimal

=

90%

percentage

BIG MATHS BEAT THAT!

Name: _____

$4.38 \times 1000 =$

4380

$199 \div 1000 =$

0.0199

Write these numbers in order...

4.5

4.055

4.05

4.04

4.5

4.055

4.05

4.04



$682 \div 11 =$

62

$461 \times 63 =$

29043

$66.6 + 33.4 = 100$

$34.1 + 7.34 =$

41.44

$11.1 - 8.88 =$

2.22

$6.89 \times 3 =$

20.67